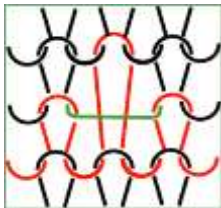


Student name:

Date:

Choose only one correct answer for the following questions:

1. The picture shows:



- a) Transferred stitch
- b) Terry loop
- c) Tuck loop
- d) Floated loop

2. The picture shows:




- a) Lace stitch pattern
- b) Knop stitch pattern
- c) Drop stitch pattern
- d) Purl jacquard pattern

3. Choose the true statement:

- a) The Tropical fabric is a silk fabric
- b) The Taffeta fabric is always in a plain weave
- c) The Damask fabric has a lower planar weight than Voile fabric
- d) The Blue print fabric is patterned using discharge printing technique

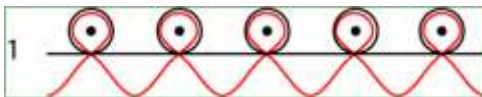
4. The picture shows:



- a) Diagonal rib weave
- b) Weft twill weave
- c) Warp twill weave
- d) Twill backed weave

5. The picture shows:

- a) Gabardine fabric
- b) Madras fabric
- c) Damask fabric
- d) Gingham fabric

6. The picture shows:

- a) Terry fabric structure
- b) Half cardigan rib structure
- c) Half Milano rib structure
- d) Cross tuck 1x1 structure

7. Choose the group of fabric in plain weave:

- a) Flannel, Taffeta, Denim, Donegal, Cashmere
- b) Poplin, Tweed, Gingham, Gabardine, Voile
- c) Oxford, Eyelet, Brocade, Chiffon, Georgette
- d) Tropical, Voile, Batiste, Taffeta, Caustic soda crepe

8. A fabric sample of 20x20 cm weighs 8 g. The planar weight of this fabric is:

- a) 80 g/m²
- b) 400 g/m²
- c) 800 g/m²
- d) 200 g/m²

9. The moss-stitch fabric is:

- a) Jersey-based fabric
- b) Rib-based fabric
- c) Purl-based fabric
- d) Reverse fabric

10. Marquisette is characterised by holes in the shape of a:

- a) Circle
- b) Hexagon
- c) Triangle
- d) Rectangle